

Surname	Centre Number	Candidate Number
Other Names		0



GCSE

3300U20-1



MATHEMATICS
UNIT 2: CALCULATOR-ALLOWED
FOUNDATION TIER

WEDNESDAY, 14 NOVEMBER 2018 – MORNING

1 hour 30 minutes

ADDITIONAL MATERIALS

A calculator will be required for this examination.
A ruler, protractor and a pair of compasses may be required.

INSTRUCTIONS TO CANDIDATES

Use black ink or black ball-point pen. Do not use gel pen or correction fluid.
You may use a pencil for graphs and diagrams only.
Write your name, centre number and candidate number in the spaces at the top of this page.
Answer **all** the questions in the spaces provided.
If you run out of space, use the continuation page at the back of the booklet. Question numbers must be given for all work written on the continuation page.
Take π as 3.14 or use the π button on your calculator.

INFORMATION FOR CANDIDATES

You should give details of your method of solution when appropriate.
Unless stated, diagrams are not drawn to scale.
Scale drawing solutions will not be acceptable where you are asked to calculate.
The number of marks is given in brackets at the end of each question or part-question.
In question 8, the assessment will take into account the quality of your linguistic and mathematical organisation, communication and accuracy in writing.

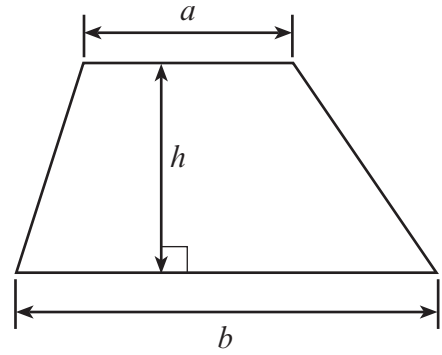
For Examiner's use only		
Question	Maximum Mark	Mark Awarded
1.	4	
2.	4	
3.	4	
4.	2	
5.	4	
6.	5	
7.	5	
8.	5	
9.	3	
10.	2	
11.	4	
12.	4	
13.	3	
14.	2	
15.	4	
16.	5	
17.	5	
Total	65	



NOV183300U20101

Formula List - Foundation Tier

Area of trapezium $= \frac{1}{2} (a + b)h$



1. Fill in the boxes below to make each calculation correct.

[4]

$$\boxed{74\text{p}} + \boxed{\text{£}2.68} = \boxed{\text{£} \dots\dots\dots}$$

$$\boxed{\text{£} \dots\dots\dots} + \boxed{\text{£}2.89} = \boxed{\text{£}3.46}$$

$$\boxed{5} \times \boxed{93\text{p}} = \boxed{\text{£} \dots\dots\dots}$$

$$\boxed{\dots\dots\dots} \times \boxed{\text{£}0.15} = \boxed{\text{£}6.30}$$

Space for working:

.....

.....

.....

.....

.....



2. (a) Write thirteen point two five in figures. [1]

.....

(b) Write the number 60 043 in words. [1]

.....

(c) Here are four digits:

8 5 3 7

(i) Use each of these digits once and once only.
What is the **largest** number that can be made? [1]

--	--	--	--

(ii) Use **three** of these digits once and once only.
What is the **smallest even** number that can be made? [1]

--	--	--



3. Here are 9 numbers:

27 19 20 32 21 29 20 24 33

(a) Find the mean of these numbers.

[3]

.....

.....

.....

.....

.....

(b) Neil says,

"To find the median, you just choose the middle number in the list.
The median of these numbers is 21."

Neil's median is incorrect.
Explain what is wrong with Neil's method.

[1]

.....

.....

.....

4. (a) One of the numbers below is a multiple of 13.
Circle the correct answer.

[1]

2226 3213 1628 2843 6110

(b) Find the value of $\frac{30^2 + 20^2}{26}$.

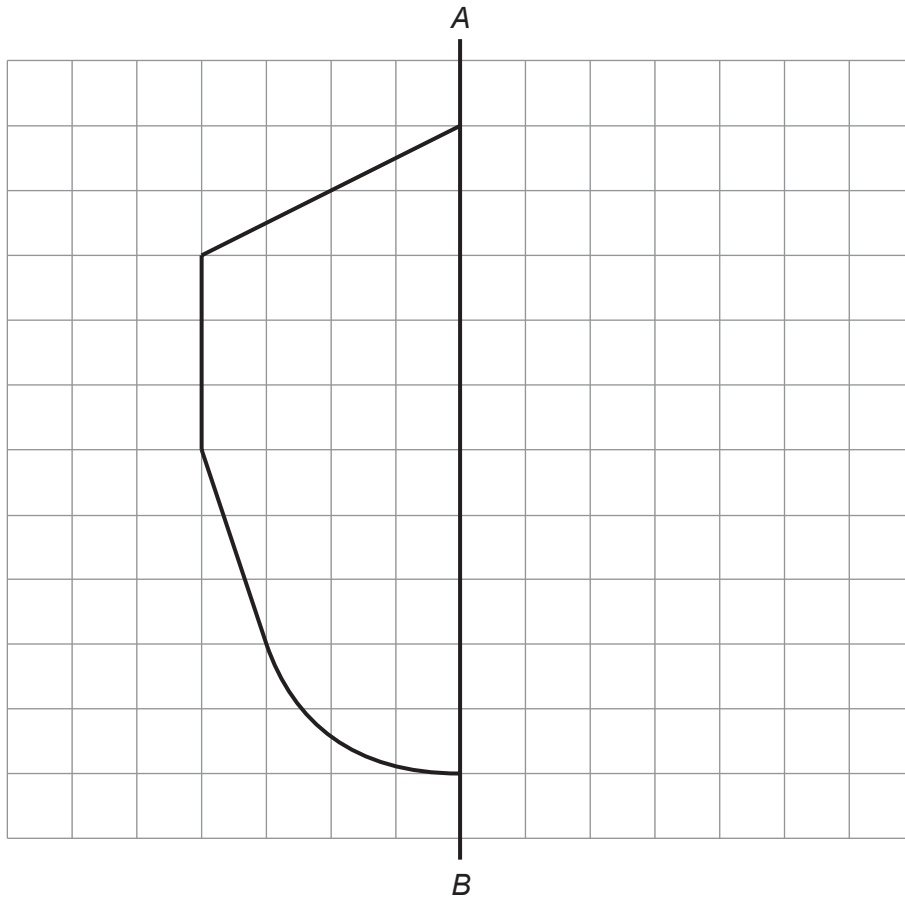
[1]

.....

.....



5. (a) Complete the following figure so that it is symmetrical about the line AB. [2]

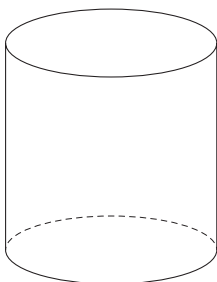


- (b) Ben draws a shape that has:
- 4 sides,
 - 4 angles of equal size,
 - a pair of sides of length 4 cm, and
 - a pair of sides of length 6 cm.

What type of shape has Ben drawn?
Circle the correct answer.

square rhombus trapezium rectangle kite

- (c) Write down the special name for the shape below. [1]



.....



- 6. (a) Efa thinks of two whole numbers.
She multiplies her numbers together.
She then adds 12.
The answer is 120.

What two numbers could Efa have been thinking about? [2]

.....

.....

.....

.....

.....

.....

.....

.....

.....

.....

Efa's two numbers could be and

- (b) Jac thinks of a number.
25% of his number is 35.

What is $\frac{1}{10}$ of Jac's number?

You must show all your working. [3]

.....

.....

.....

.....

.....

.....

.....

.....

.....

.....

$\frac{1}{10}$ of Jac's number is



7. (a) One of the values below is the solution to $k + 3 = 6 \cdot 9$
Circle the correct answer. [1]

2·3

20·7

3·9

9·9

207

- (b) Simplify the expression $12w + 15w - w$. [1]

.....

- (c) Write down the next term in the following sequence. [1]

14, 20, 26, 32,

- (d) Describe in words the rule for continuing the following sequence. [1]

4, 12, 36, 108, ...

Rule:

.....

- (e) Look at the sequence:

8, 16, 24, 32, ...

Will any of the first 100 terms of this sequence be a prime number?
 Explain how you know. [1]

.....



9. Find 57% of 83.5.
Give your answer correct to 1 decimal place. [3]

.....

.....

.....

.....

10. A cuboid has a volume of 97.6 cm^3 .
The length of the cuboid is 6.1 cm and its width is 5 cm.
Calculate the height of the cuboid. [2]

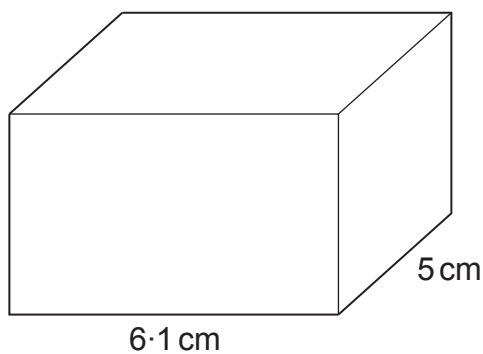


Diagram not drawn to scale

.....

.....

.....

.....

.....

.....




11. One day, Gwyn was asleep for 8 hours and awake for the remaining hours.

Draw an accurate pie chart to illustrate this information.

[4]

Pie chart showing Gwyn's sleeping and waking hours.



Space for working:

.....

.....

.....

.....

.....

.....



14. (a) Solve $\frac{m}{2} = 4.8$.

[1]

.....

.....

.....

(b) The n th term of a sequence is given by $3n - 20$.

What is the value of the 6th term?

[1]

.....

.....



16. (a) Calculate the approximate difference in length between 1 mile and 1.5 km.
Give your answer in metres.

[3]

.....

.....

.....

.....

.....

.....

.....

- (b) Convert an area of 4 m^2 into cm^2 .

[2]

.....

.....

.....

.....

.....

$$4 \text{ m}^2 = \text{.....} \text{ cm}^2$$



BLANK PAGE

**PLEASE DO NOT WRITE
ON THIS PAGE**



BLANK PAGE

**PLEASE DO NOT WRITE
ON THIS PAGE**

